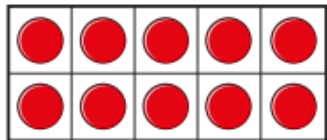
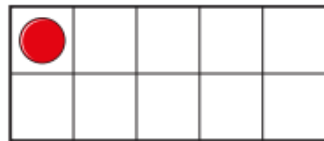
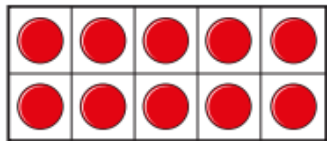
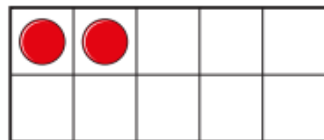
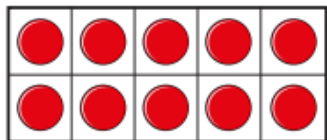
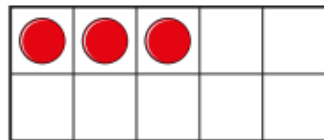
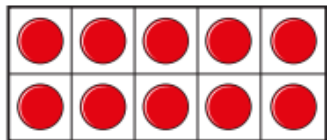


Write the numbers shown.









Match the numerals to the words.

13

twelve

10

thirteen

12

ten

11

eleven

Complete the sentences.



11 has ten and one.



12 has ten and ones.



13 has ten and ones.

Challenge:

Tiny has some beads on
a bead string.



I will count to see
how many. 1, 2, 3, 4 ...

Does Tiny need to count the beads?

Challenge:

Tiny has some beads on
a bead string.



I will count to see
how many. 1, 2, 3, 4 ...

Does Tiny need to count the beads?